

Nanyang Primary School
Mathematics
Primary 1
Term 1 Combined Topical Test

Name: _____ () Marks: / 40

Class: P1 _____ Parent's Signature: _____

Date: _____

Section A

Questions 1 to 8 carry 2 marks each.

For each question, four options are given.


One of them is the correct answer.

Choose the correct answer and write its number (1, 2, 3 or 4)

in the brackets () provided.

(Total: 16 marks)

1.



There are _____ shrimps.

(1) 5

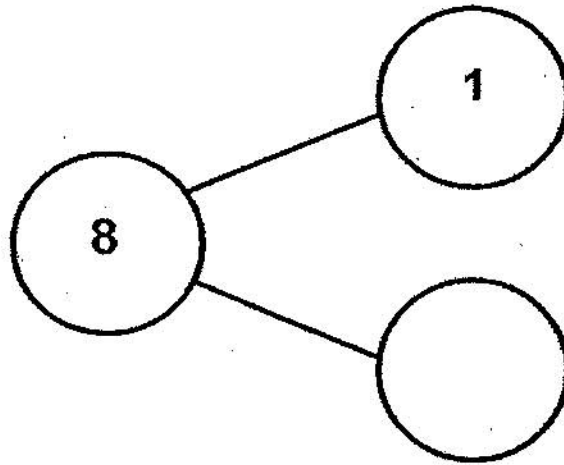
(2) 6

(3) 7

(4) 8

()

2. What is the missing number?




- (1) 9
- (3) 7

- (2) 8
- (4) 6


()

3. Which of the following has the most objects?


Set A




Set B



Set C



Set D



- (1) Set A
- (3) Set C

- (2) Set B
- (4) Set D


()

4. Which 2 sets add up to 10 mangoes?


Set A




Set B



Set C

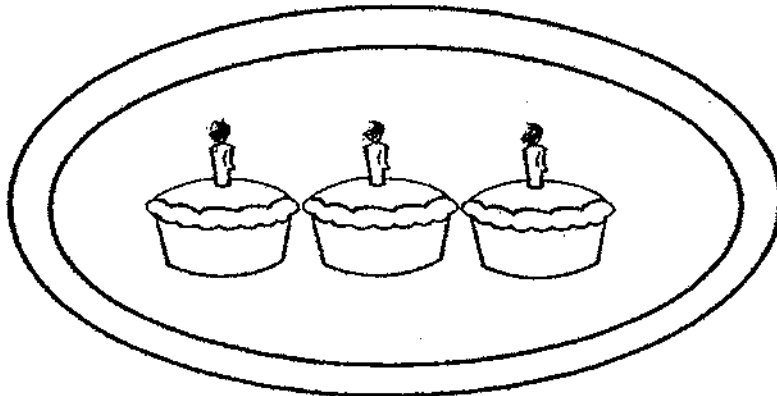


Set D



- (1) Set A and B (2) Set A and C
(3) Set A and D (4) Set B and C ()

5. Mrs Lim has some cupcakes on the plate.
How many cupcakes must she buy so that she has 7
cupcakes altogether?



- (1) 7 (2) 6
(3) 5 (4) 4 ()


6. _____ and _____ make 5.

- (1) 0 and 4
- (3) 2 and 4.

- (2) 1 and 4
- (4) 3 and 4

()

7. Look at the pattern below. What is the missing number?

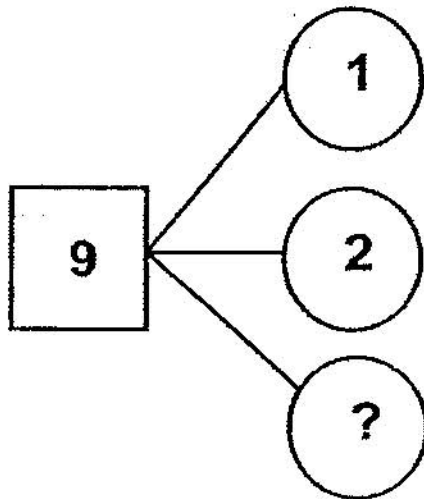


- (1) 0
- (3) 6

- (2) 5
- (4) 7

()

8. What is the missing number?



- (1) 7
- (3) 5

- (2) 6
- (4) 4

()

Section B

Questions 9 to 17 carry two marks each.

Show your working clearly in the space provided for each question and write your answer in the blank provided.

(Total: 18 marks)

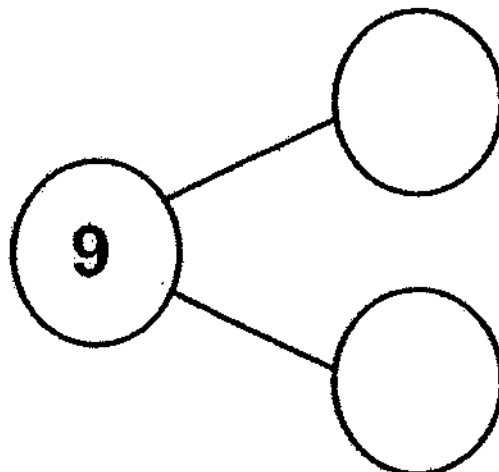

9. Write the numbers in **words**.

a) 8 _____

b) 7 _____

10. Break the set into 2 parts.

Then fill in the missing numbers in the number bond to show the two parts.



11. Colour the pair of numbers that make 6.

0	6
---	---

5	3
---	---

6	1
---	---

2	3
---	---

4	3
---	---

12. Arrange the numbers in order. Begin with the smallest.

5


3

1

4

8


13. Colour 5 bats and 3 baseballs.



14. a) $1 + 3 + \square = 8$

b) $\square - 5 = 5$

15. Look at the pictures below.

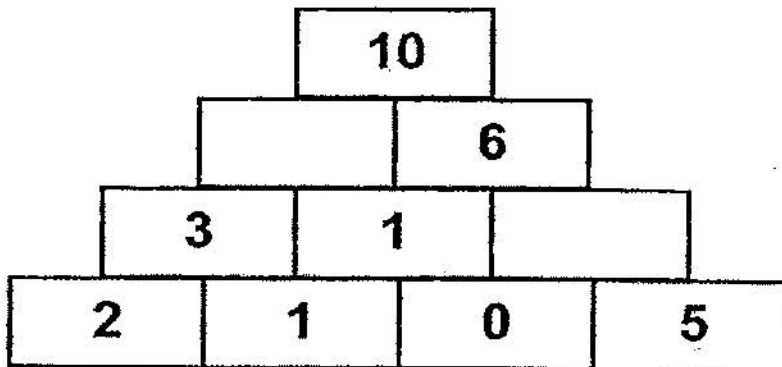


There are _____ more cars than motorcycles

16. Denise has 3 more sweets than Alice.
Siti has 2 fewer sweets than Denise.
Who has the most sweets?

_____ has the most sweets.

17. Study the pattern carefully. Fill in the missing numbers.



Section C


Questions 18 to 19 carry 3 marks each.

Do these word problems carefully.

Show your working clearly in the space provided for each question.

(Total: 6 marks)

18. Mrs Ang buys 10 eggs.
She boils 3 eggs and keeps the rest.
How many eggs does Mrs Ang keep?



Mrs Ang keeps _____ eggs.

19. Alison has 4 bookmarks.
Her mother gives her 5 more bookmarks.
How many bookmarks does she have now?



She has _____ bookmarks now.

© End of Paper ©
Please Check Carefully

ANSWER SHEET

EXAM PAPER 2011

SCHOOL : NANYANG
SUBJECT : PRIMARY 1 MATHEMATICS

TERM : Term 1

Q1	Q2	Q3	Q4	Q5	Q6	Q7	Q8
1	3	2	4	4	2	3	2


9)a)eight

b)seven

10) $\begin{array}{l} 6 \\ 9 \\ 3 \end{array}$

11)06

12)1,3,4,5,8



14)a)4

b)10

15)2

16)Denise

17)4, 5

18) $10 - 3 = 7$

Mrs Ang keeps 7 eggs.

19) $4 + 5 = 9$

She has 9 bookmarks now.